

Consolidation
1 - 1

Les nombres de 0 à 100
Représenter des nombres

Corrigé


1. **Écris** les nombres manquants.

a)

12	13	14	15	16	17	18	19
	23	24	25	26	27	28	29
		34	35	36	37	38	39

b)

34	35	36	37		
44	45	46	47	48	
54	55	56	57	58	59



2. **Écris** les nombres manquants.

a)

20	21	22	23	24	25	26	27	28
----	----	----	----	----	----	----	----	----

b)


59	60	61	62	63	64	65	66	67
----	----	----	----	----	----	----	----	----
















c)

68	69	70	71	72	73	74	75	76
----	----	----	----	----	----	----	----	----

d)

92	93	94	95	96	97	98	99	100
----	----	----	----	----	----	----	----	-----

3. **Représente** les nombres indiqués de deux façons différentes en utilisant des  pour les dizaines et des ● pour les unités.
Exemples de réponses.

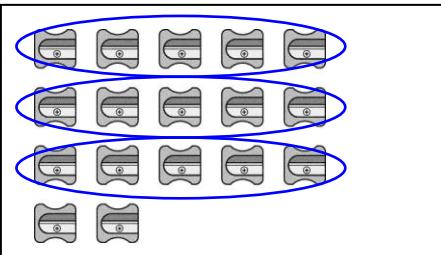
<p>a)</p> 		
<p>b)</p> 		
<p>c)</p> 		
<p>d)</p> 		
<p>e)</p> 		

Consolidation
1 - 2

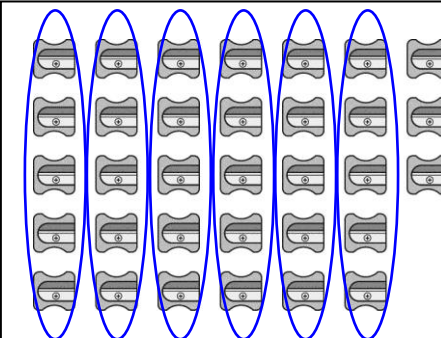
Des stratégies pour dénombrer

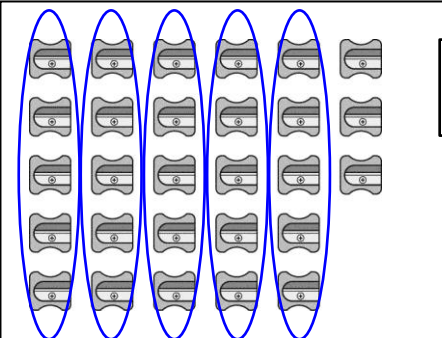
Corrigé

1. **Entoure** les taille-crayons par groupes de 5.
Écris le nombre de tailles-crayons.

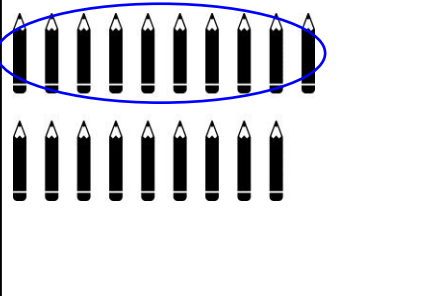
a)  17

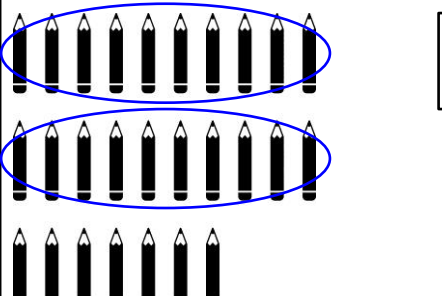
b)  20

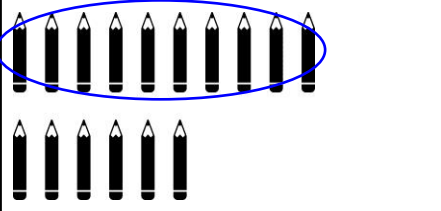
c)  33

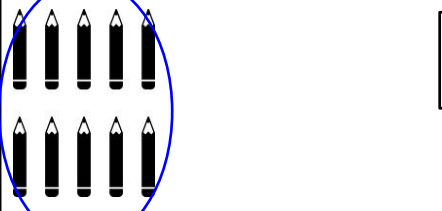
d)  28

2. **Entoure** les crayons par groupes de 10.
Écris le nombre de crayons.

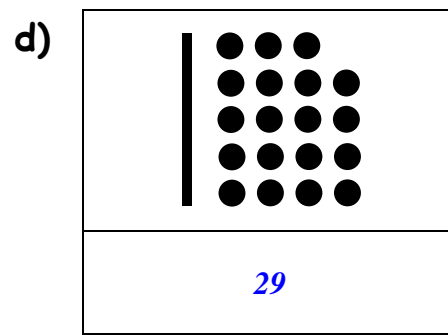
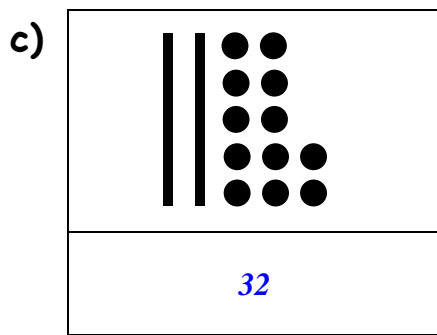
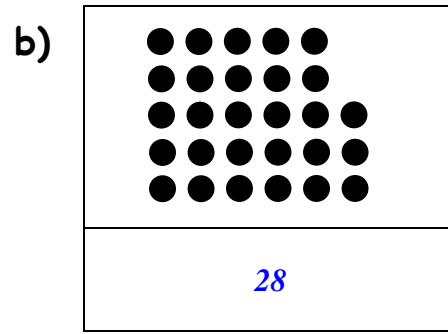
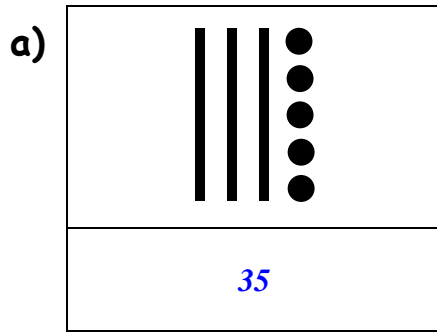
a)  19

b)  27

c)  16

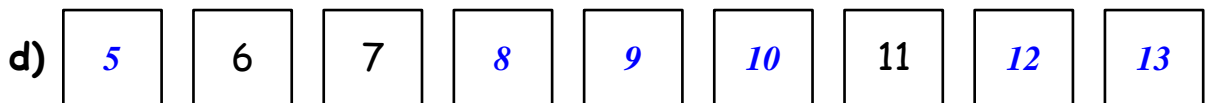
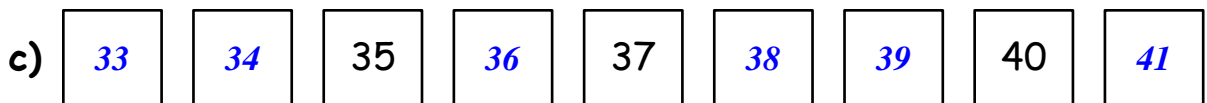
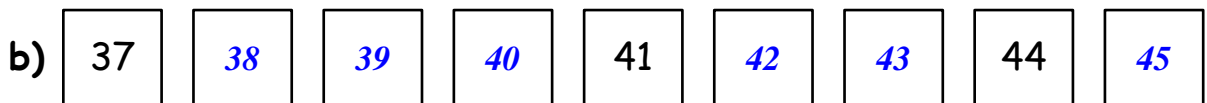
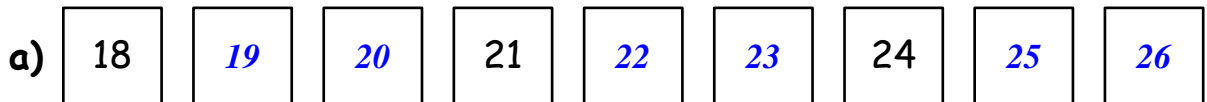
d)  10

3. Écris le nombre représenté.



Te souviens-tu?

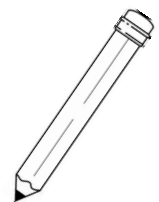
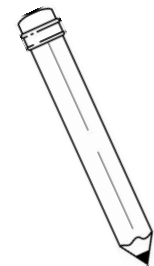
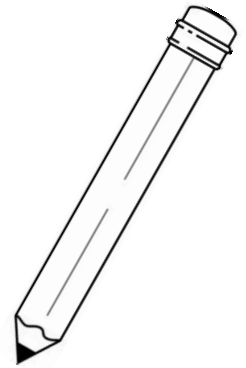
4. Écris les nombres manquants.



Consolidation**1 - 4****Les régularités non numériques**
Les régularités numériques**Corrigé**

1. Écris les 2 nombres suivants de chaque suite.


- a) (1) (4) (7) (10) (13) (16) (19)
- b) (5) (10) (15) (20) (25) (30) (35)
- c) (26) (30) (34) (38) (42) (46) (50)
- d) (13) (15) (17) (19) (21) (23) (25)
- e) (22) (20) (18) (16) (14) (12) (10)
- f) (24) (20) (16) (12) (8) (4) (0)
- g) (0) (3) (6) (9) (12) (15) (18)
- h) (17) (22) (27) (32) (37) (42) (47)
- i) (50) (45) (40) (35) (30) (25) (20)
- j) (37) (34) (31) (28) (25) (22) (19)
- k) (6) (10) (14) (18) (22) (26) (30)
- l) (5) (11) (17) (23) (29) (35) (41)



2. Écris la régularité de chaque suite.



Régularité +1 +1



Régularité +1 +1



Régularité



Régularité



Te souviens-tu ?

3. Écris le nombre de fraises de chaque groupe.

Compare le nombre de fraises à l'aide des symboles $<$, $>$ ou $=$.

a)
30

$>$

29

b)
42

$<$

43

Consolidation
1 - 3

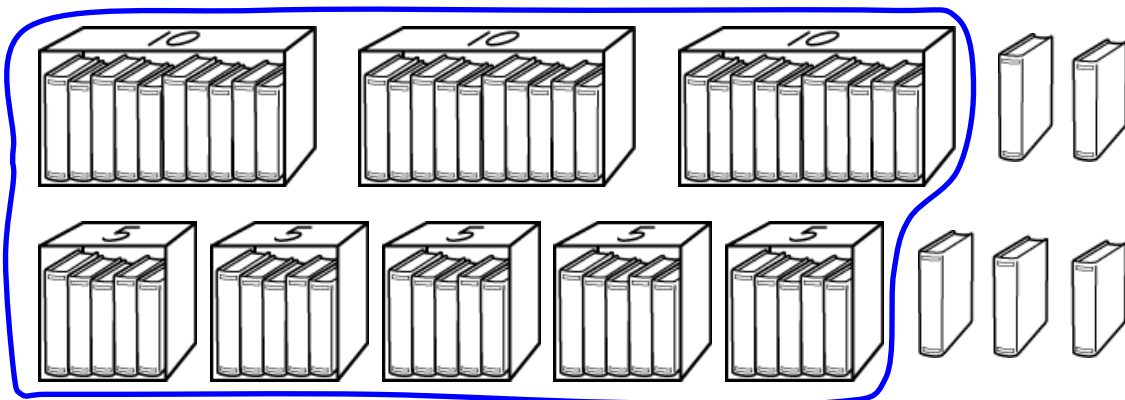
Le dénombrement à partir d'un nombre donné
Plus petit, plus grand, égal

Corrigé

1. Relie les ensembles de balles au bon nombre.


2. La bibliothèque de la classe peut contenir 55 livres.
Entoure les livres qu'il faut pour remplir la bibliothèque.


Exemple de réponse.

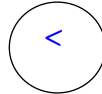



3. **Écris le nombre d'étoiles de chaque ensemble.**


Compare les nombres en utilisant le bon symbole : <, > ou =.

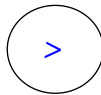
a) 
20


32



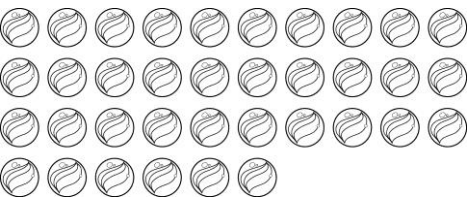
b) 
22

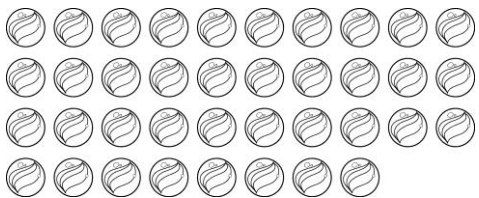

18

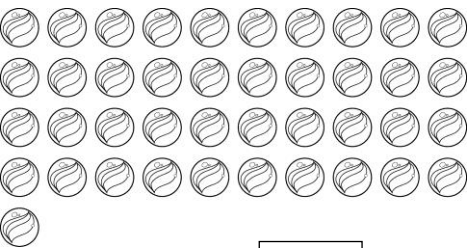


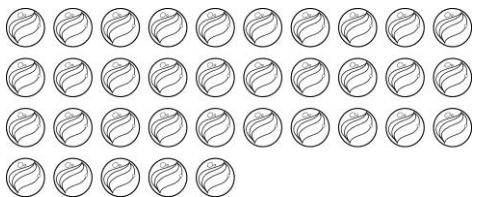
Te souviens-tu ?

4. **Écris le nombre de billes.**

a) 
36 billes

b) 
38 billes

c) 
41 billes

d) 
35 billes